

WHMIS and Safety Worksheet









1. What does WHMIS stand for?

2. What is the PURPOSE of WHMIS?

3. What information would you find on a WHMIS label?

4. Do all products and chemicals have WHMIS labels? Explain.

5. Identify the following symbols. Write down at least one hazard this symbol represents and give one example of a material or chemical that may have this symbol.













							
A	B	C	D	E	F	G	H

	Identify Symbol	One Hazard	Example
A			
B			
C			
D			
E			
F			
G			
H			

What information is found on a MSDS - Material Safety Data Sheet?

Household Hazardous Symbols:

Identify the following International Safety Symbols.

	A	B	C	D
1				
2				
3				

A1:		B1:
A2:		B2:
A3:		B3:
C1:		D1:
C2:		D2:
C3:		D3: